


# 小数のたし算とひき算6

◎位の揃わない小数のひき算

# 16

目指せ80点!



名まえ

・ 次の計算をなさい。(各10点)

①

	8	.	3	4
-	1	.	6	
-----				

②

	9	.	4	3
-	0	.	2	2
-----				

③

	6	.	8	1	7
-	1	.	3	3	8
-----					

④

	8	2	
-	2	2	7
-----			

⑤

	5	7	.	9	5
-		9	.	6	
-----					

⑥

	7	3	.	7	
-		2	.	1	2
-----					


⑦  $2.6 - 0.75$

⑧  $6 - 1.18$

⑨  $4.61 - 2.7$

⑩  $55.97 - 7.9$






# 小数のたし算とひき算6

◎位の揃わない小数のひき算

# 16

目指せ80点!



名まえ

・ 次の計算をしなさい。(各10点)

①

	<del>8</del>	3	4
-	1	6	0
<hr/>			
	6	7	4

②

	9	4	3
-	0	2	2
<hr/>			
	9	2	1

③

	6	<del>8</del>	<del>1</del>	7
-	1	3	3	8
<hr/>				
	5	4	7	9

④

	<del>8</del>	<del>2</del>	0
-	2	2	7
<hr/>			
	5	9	3

⑤

	<del>5</del>	7	9	5
-		9	6	0
<hr/>				
	4	8	3	5

⑥

	7	3	<del>7</del>	0
-		2	1	2
<hr/>				
	7	1	5	8

⑦  $2.6 - 0.75$

	<del>2</del>	<del>6</del>	0
-	0	7	5
<hr/>			
	1	8	5

⑧  $6 - 1.18$

	<del>6</del>	<del>0</del>	0
-	1	1	8
<hr/>			
	4	8	2

⑨  $4.61 - 2.7$

	<del>4</del>	6	1
-	2	7	0
<hr/>			
	1	9	1

⑩  $55.97 - 7.9$

	<del>5</del>	5	9	7
-		7	9	0
<hr/>				
	4	8	0	7

