



# 角の大きさ 10

● 反時計回りの角の作図

16

めざせ75点!




名まえ \_\_\_\_\_

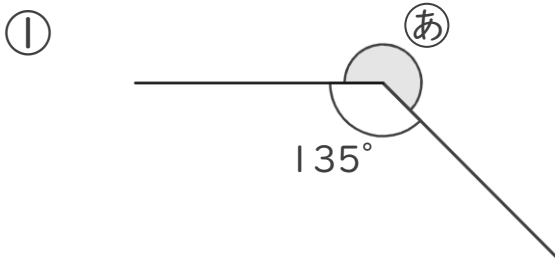
1 次の角をかきましょう。(各25点)

①  $45^\circ$

②  $120^\circ$

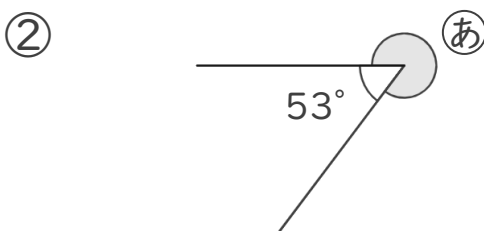


2 ②の角度を、計算で求めましょう。(各25点)



式：

答え ( )



式：

答え ( )



# 角の大きさ 10

● 反時計回りの角の作図

16

めざせ75点!

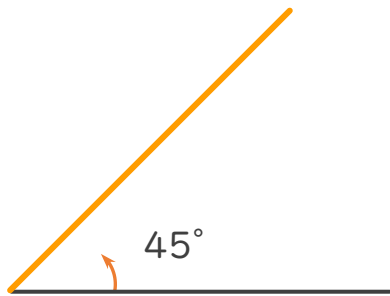


てん

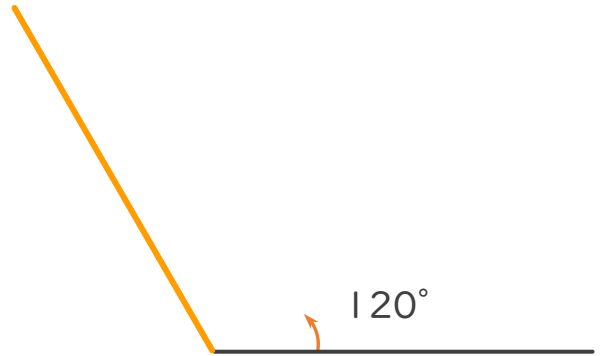
名まえ \_\_\_\_\_

1 次の角をかきましょう。(各25点)

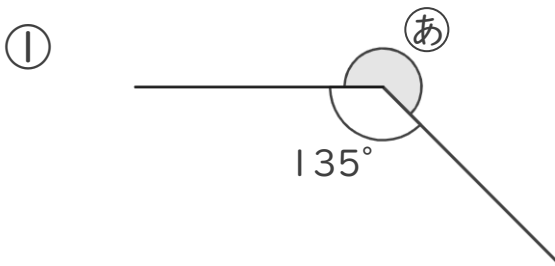
①  $45^\circ$



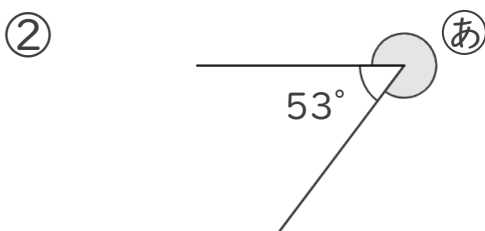
②  $120^\circ$



2 ①の角度を、計算で求めましょう。(各25点)



式:  $360^\circ - 135^\circ = 225^\circ$  答え (  $225^\circ$  )



式:  $360^\circ - 53^\circ = 307^\circ$  答え (  $307^\circ$  )