

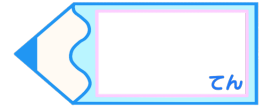


小数のわり算6

● 小数点以下1桁の
帯小数 ÷ 2桁の整数

16

目指せ80点!



名まえ

・ 次の計算をしなさい。(各20点)

①

4)	3	1	.	6

②

1	3)	3	5	.	1

③



$46.2 \div 6$

④

$36.4 \div 13$

⑤

$59.5 \div 35$



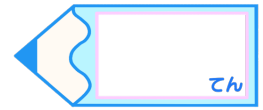


小数のわり算6

○ 小数点以下1桁の
帯小数 ÷ 2桁の整数

16

目指せ80点!



名まえ

・ 次の計算をしなさい。(各20点)

①

$$\begin{array}{r} 7.9 \\ 4 \overline{) 31.6} \\ \underline{28} \\ 36 \\ \underline{36} \\ 0 \end{array}$$

②

$$\begin{array}{r} 2.7 \\ 13 \overline{) 35.1} \\ \underline{26} \\ 91 \\ \underline{91} \\ 0 \end{array}$$

③ $46.2 \div 6$



$$\begin{array}{r} 7.7 \\ 6 \overline{) 46.2} \\ \underline{42} \\ 42 \\ \underline{42} \\ 0 \end{array}$$

④ $36.4 \div 13$

$$\begin{array}{r} 2.8 \\ 13 \overline{) 36.4} \\ \underline{26} \\ 104 \\ \underline{104} \\ 0 \end{array}$$

⑤ $59.5 \div 35$

$$\begin{array}{r} 1.7 \\ 35 \overline{) 59.5} \\ \underline{35} \\ 245 \\ \underline{245} \\ 0 \end{array}$$



すらすらぷりん