


# 小数のたし算とひき算2

# 16

◎位の揃わない小数のたし算

目指せ80点!



名まえ

・ 次の計算をなさい。(各10点)

①

	1	7	.	1
+		0	.	7
<hr/>				

②

	4	.	7	1
+	3	.	7	8
<hr/>				

③

	1	4		
+	6	.	4	9
<hr/>				

④

	2	4			
+	5	.	4	4	2
<hr/>					

⑤

	3	.	5	6	4
+	1	.	0	4	7
<hr/>					

⑥


	3	.	2	2
+	5	.	7	
<hr/>				

⑦  $19 + 7.73$

⑧  $4.75 + 4.607$

⑨  $4.48 + 3.5$

⑩  $1.48 + 0.64$




# 小数のたし算とひき算2

◎位の揃わない小数のたし算

# 16

目指せ80点!



名まえ

・ 次の計算をなさい。(各10点)

$$\begin{array}{r} \textcircled{1} \quad \begin{array}{|c|c|c|} \hline & 1 & 7.1 \\ \hline + & & 0.7 \\ \hline & 1 & 7.8 \\ \hline \end{array} \end{array}$$

$$\begin{array}{r} \textcircled{2} \quad \begin{array}{|c|c|c|} \hline & 4 & 7.1 \\ \hline + & 3 & 7.8 \\ \hline & 8 & 4.9 \\ \hline \end{array} \end{array}$$

$$\begin{array}{r} \textcircled{3} \quad \begin{array}{|c|c|c|c|} \hline & 1 & 4 & \\ \hline + & & 6.4 & 9 \\ \hline & 2 & 0.4 & 9 \\ \hline \end{array} \end{array}$$

$$\begin{array}{r} \textcircled{4} \quad \begin{array}{|c|c|c|c|} \hline & 2 & 4 & \\ \hline + & & 5.4 & 4.2 \\ \hline & 2 & 9.4 & 4.2 \\ \hline \end{array} \end{array}$$

$$\begin{array}{r} \textcircled{5} \quad \begin{array}{|c|c|c|c|} \hline & 3 & 5 & 6.4 \\ \hline + & 1 & 0 & 4.7 \\ \hline & 4 & 6 & 1.1 \\ \hline \end{array} \end{array}$$

$$\begin{array}{r} \textcircled{6} \quad \begin{array}{|c|c|c|} \hline & 3 & 2.2 \\ \hline + & 5 & 7 \\ \hline & 8 & 9.2 \\ \hline \end{array} \end{array}$$

⑦  $19 + 7.73$

$$\begin{array}{r} 19. \\ + 7.73 \\ \hline 26.73 \end{array}$$

⑧  $4.75 + 4.607$

$$\begin{array}{r} 4.75 \\ + 4.607 \\ \hline 9.357 \end{array}$$

⑨  $4.48 + 3.5$

$$\begin{array}{r} 4.48 \\ + 3.5 \\ \hline 7.98 \end{array}$$

⑩  $1.48 + 0.64$

$$\begin{array}{r} 1.48 \\ + 0.64 \\ \hline 2.12 \end{array}$$