



# 小数の表し方4

# 3

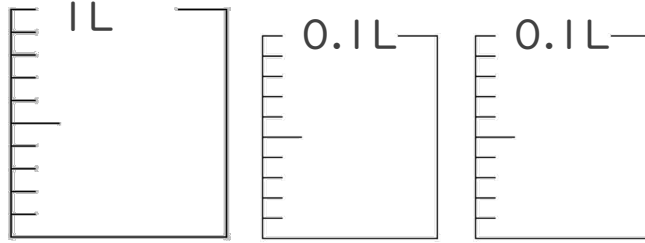
◎ 水のかさをぬる

日にち：            月            日

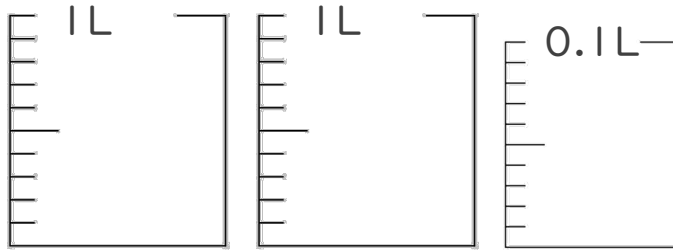
名まえ \_\_\_\_\_

・ 次の水のかさの分だけ色をぬりましょう。

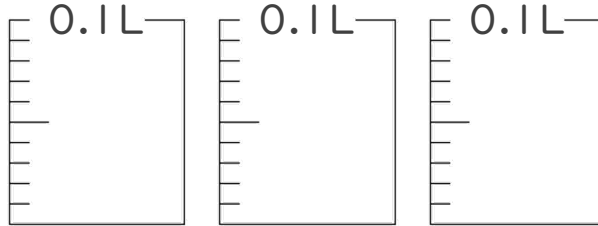
① 1.18 L



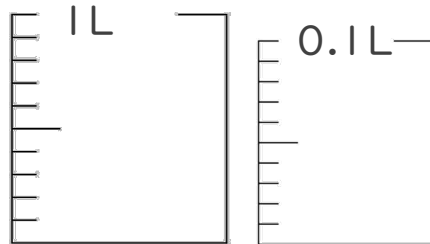
② 2.03 L



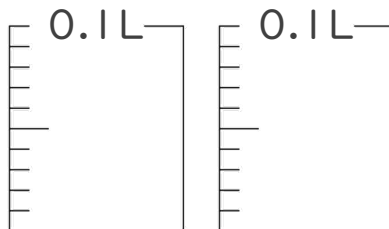
③ 0.25 L



④ 1.09 L



⑤ 0.13 L





# 小数の表し方4

## 3

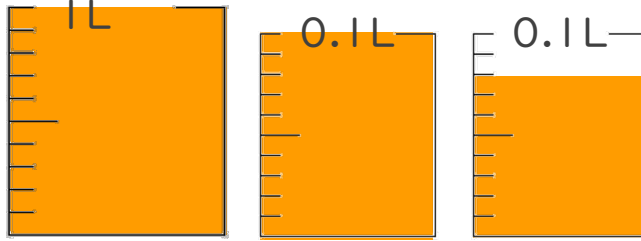
◎ 水のかさをぬる

日にち：            月            日

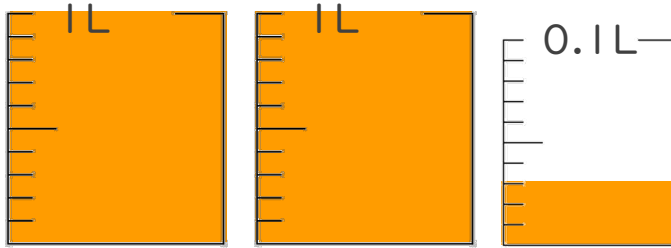
名まえ \_\_\_\_\_

・ 次の水のかさの分だけ色をぬりましょう。

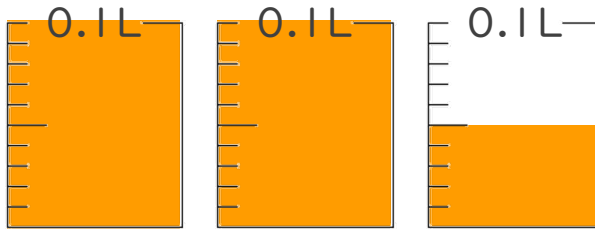
① 1.18 L



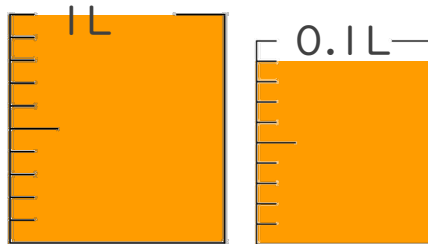
② 2.03 L



③ 0.25 L



④ 1.09 L



⑤ 0.13 L

