



垂直、平行と四角形

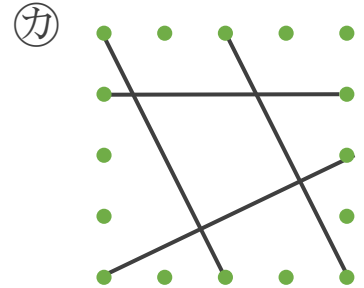
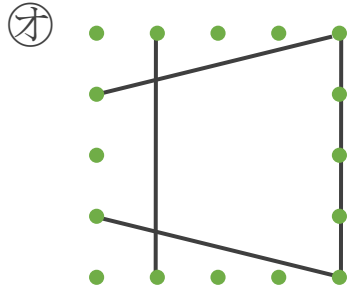
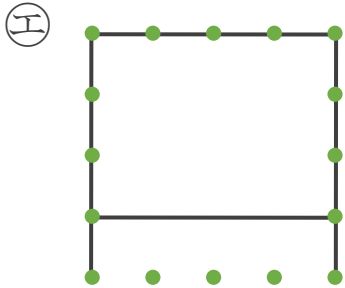
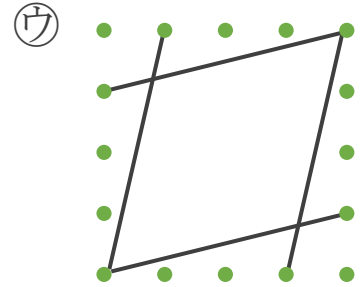
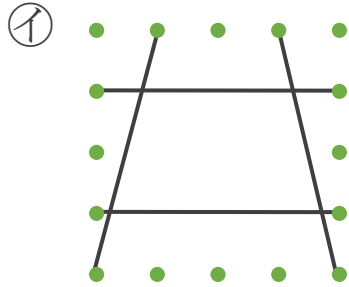
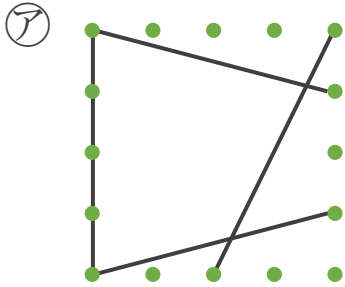
色々な四角形と
平行な辺の数

3

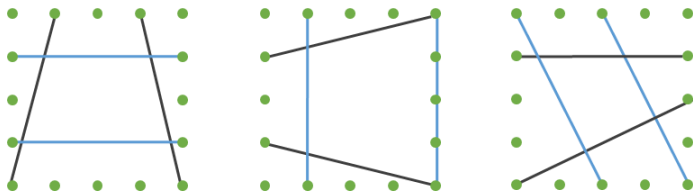
日にち： 月 日

名まえ _____

・ 平行な直線の組の数に注目して、次の四角形を3つのなかまに分けましょう。(うすい字はなぞりましょう。)

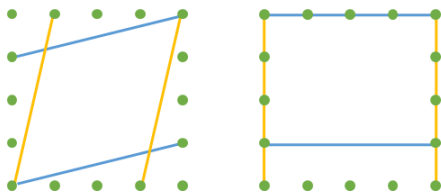


① 平行な直線が1組



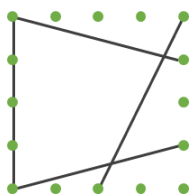
答え: ①, , _____

② 平行な直線が2組



答え: _____

③ 平行な直線がない



答え: _____





垂直、平行と 四角形

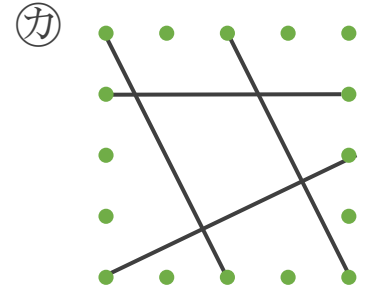
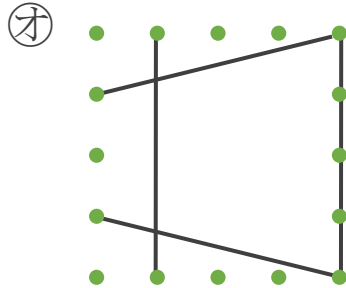
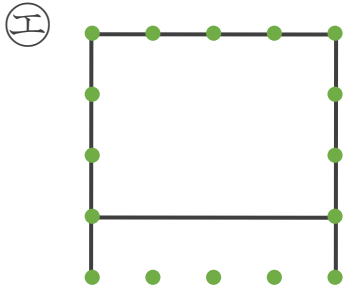
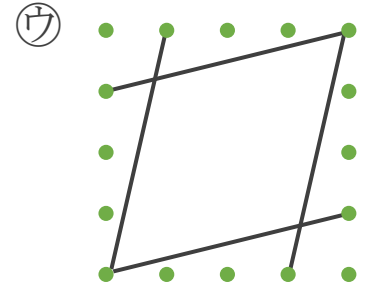
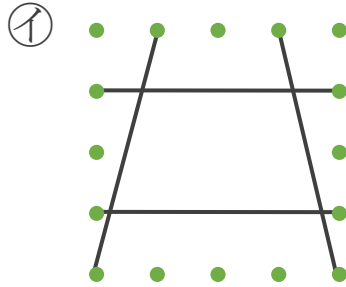
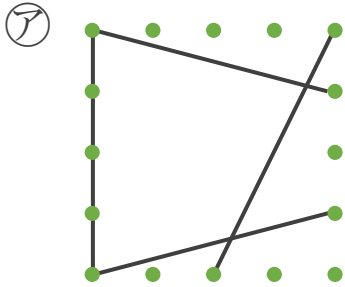
色々な四角形と
平行な辺の数

3

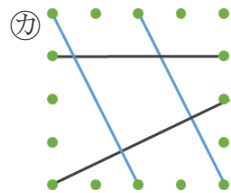
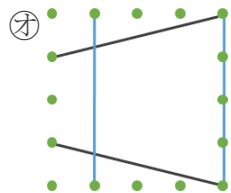
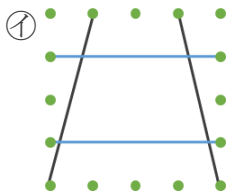
日にち： 月 日

名まえ _____

・ 平行な直線の組の数に注目して、次の四角形を3つのなかまに分けましょう。(うすい字はなぞりましょう。)

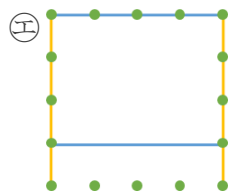
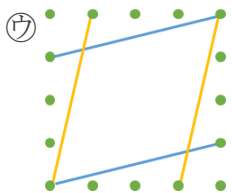


① 平行な直線が1組



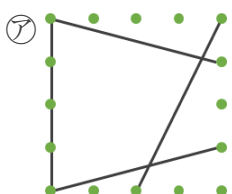
答え: ①, ②, ③

② 平行な直線が2組



答え: ④, ⑤

③ 平行な直線がない



答え: ⑥

