

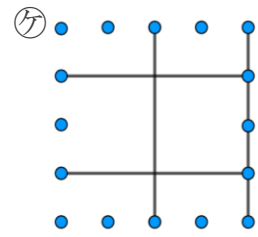
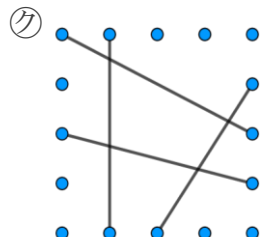
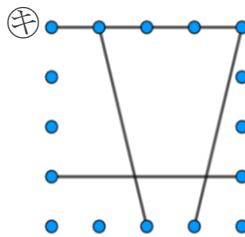
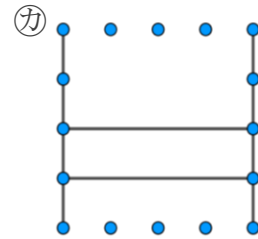
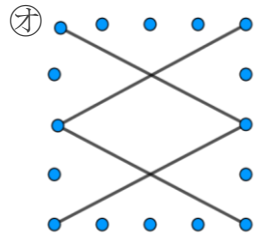
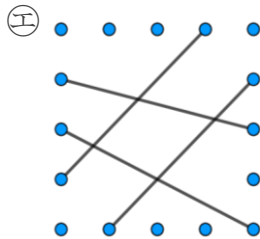
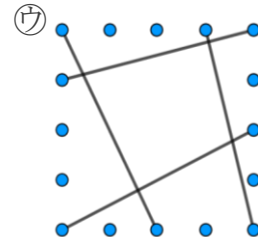
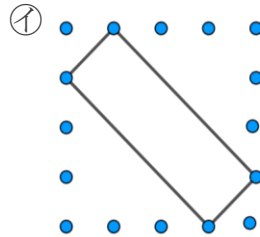
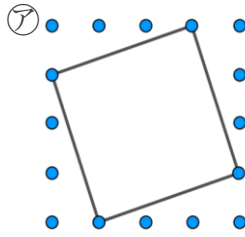


垂直, 平行と  
四角形 〇〇  
色々な四角形と  
平行な辺の数

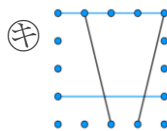
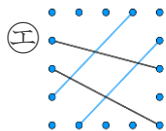
4

日にち： 月 日  
名まえ

・ 平行な直線の組の数に注目して、次の四角形を3つのなかまに分けてみましょう。

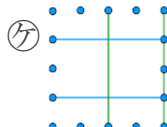
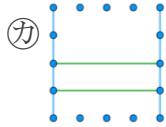
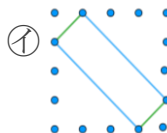
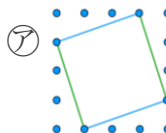


① 平行な直線が1組



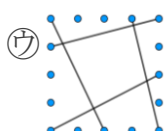
答え:

② 平行な直線が2組



答え:

③ 平行な直線がない



答え:

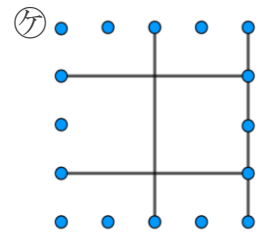
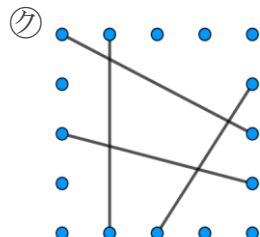
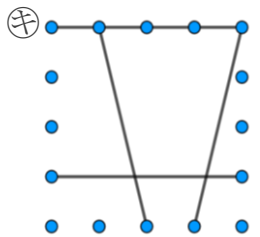
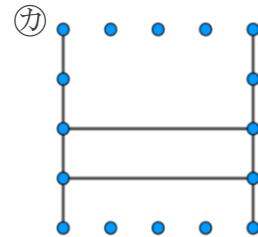
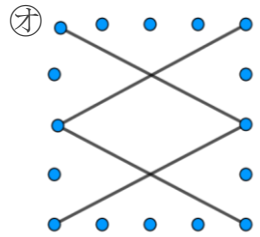
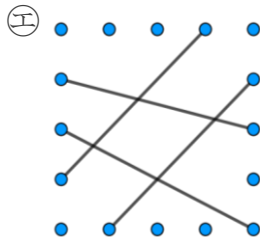
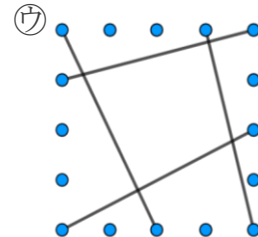
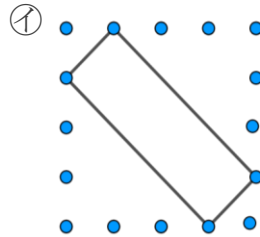
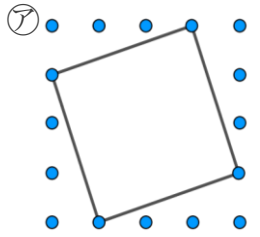


垂直, 平行と  
四角形 〇〇  
色々な四角形と  
平行な辺の数

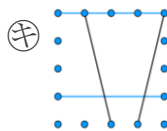
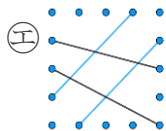
4

日にち： 月 日  
名まえ

・ 平行な直線の組の数に注目して、次の四角形を3つのなかまに分けてみましょう。



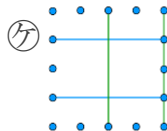
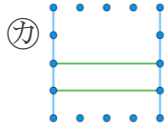
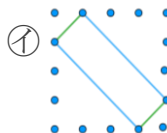
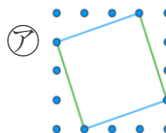
① 平行な直線が1組



答え:

エ, キ

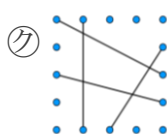
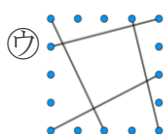
② 平行な直線が2組



答え:

ア, イ, オ, カ, ケ

③ 平行な直線がない



答え:

ウ, ク