



垂直、平行と 四角形

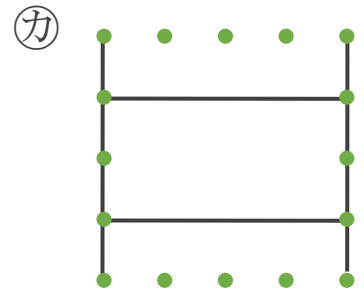
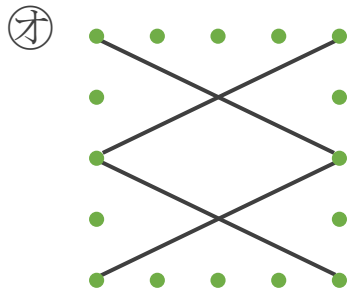
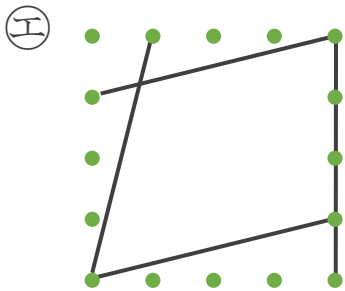
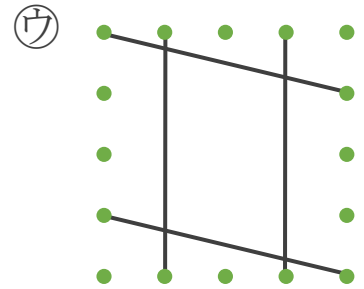
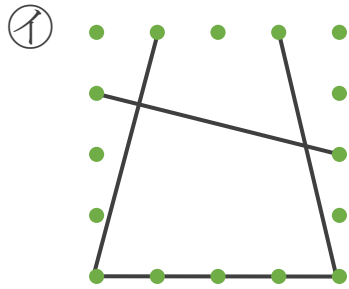
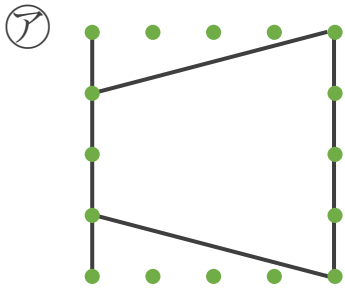
色々な四角形と
平行な辺の数

4

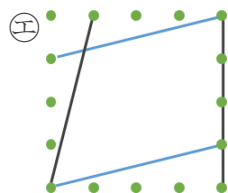
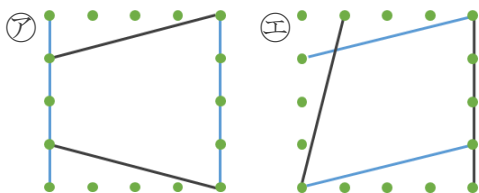
日にち： 月 日

名まえ _____

・ 平行な直線の組の数に注目して、次の四角形を3つのなかまに分けましょう。(うすい字はなぞりましょう。)

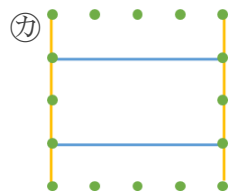
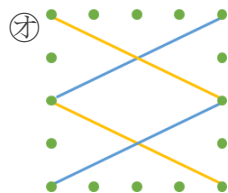
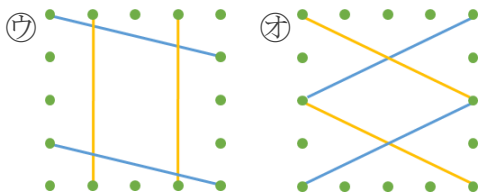


① 平行な直線が1組



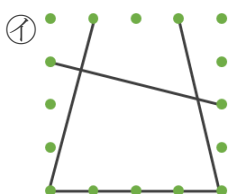
答え: _____,

② 平行な直線が2組



答え: (ウ), _____

③ 平行な直線がない



答え: _____





垂直, 平行と 四角形

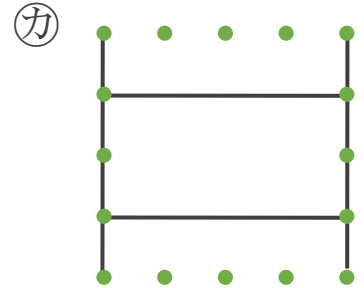
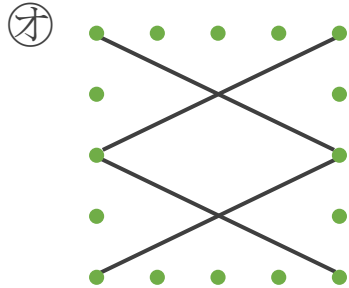
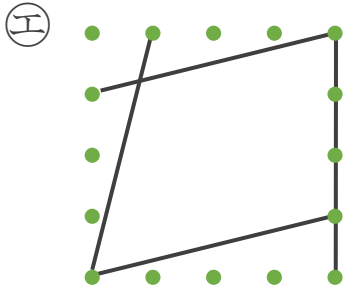
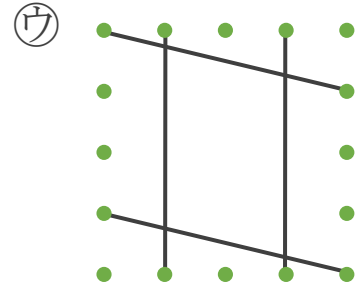
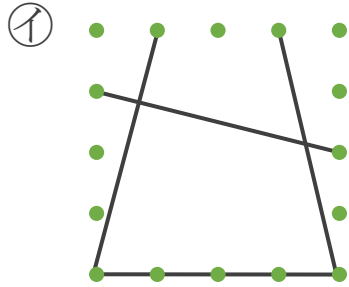
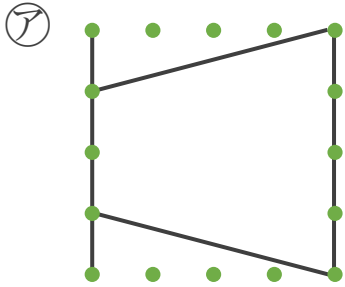
色々な四角形と
平行な辺の数

4

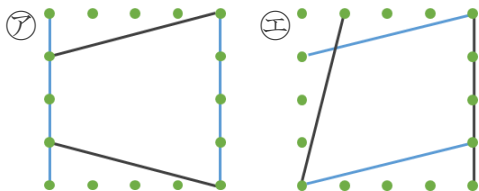
日にち： 月 日

名まえ _____

・ 平行な直線の組の数に注目して、次の四角形を3つのなかまに分けましょう。(うすい字はなぞりましょう。)

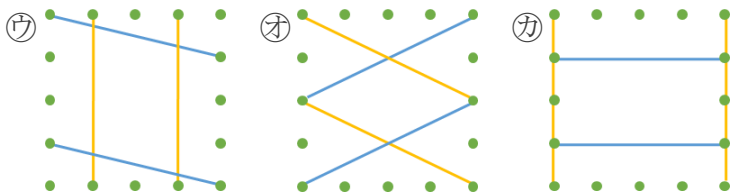


① 平行な直線が1組



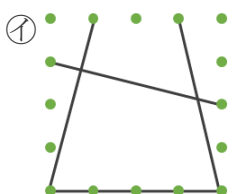
答え: ア, エ

② 平行な直線が2組



答え: ウ, オ, カ

③ 平行な直線がない



答え: イ

