



# 小数のかけ算 10

● かけ算とたし算ひき算の  
計算の順じよ




日にち：            月            日


名まえ \_\_\_\_\_

・ 次の計算をしましょう。


①  $4.7 \times 7 + 6$




②  $3.1 + 17.6 \times 5$



③  $6.8 \times 6 - 9.2$



④  $9.4 - 1.4 \times 6$





# 小数のかけ算 10

● かけ算とたし算ひき算の  
計算の順じよ



日にち：            月            日

名まえ \_\_\_\_\_

・ 次の計算をしましょう。

$$\begin{aligned} \textcircled{1} \quad & 4.7 \times 7 + 6 \\ & = 32.9 + 6 \\ & = 38.9 \end{aligned}$$

	4	.	7		3	2	.	9
×			7	+		6	.	0
32.9				38.9				

$$\begin{aligned} \textcircled{2} \quad & 3.1 + 17.6 \times 5 \\ & = 3.1 + 88 \\ & = 91.1 \end{aligned}$$

	1	7	.	6			3	.	1
×				5	+	8	8	.	0
88.0					91.1				

$$\begin{aligned} \textcircled{3} \quad & 6.8 \times 6 - 9.2 \\ & = 40.8 - 9.2 \\ & = 31.6 \end{aligned}$$

	6	8		4	0	.	8
×		6	-	9	.	2	
40.8				31.6			

$$\begin{aligned} \textcircled{4} \quad & 9.4 - 1.4 \times 6 \\ & = 9.4 - 8.4 \\ & = 1 \end{aligned}$$

	1	4		9	4
×		6	-	8	4
8.4			1.0		

