



小数のわり算 10

◎ わりすすみ (3けた)

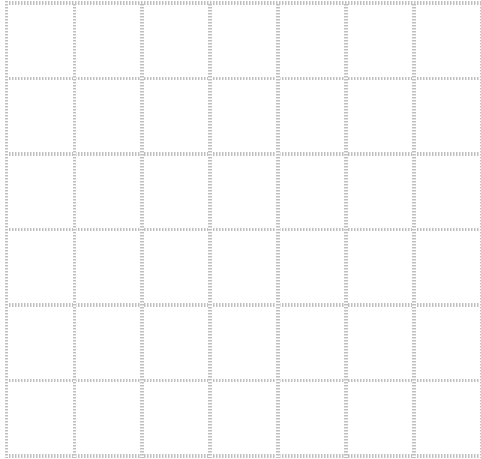
12

日にち： 月 日


名まえ _____

・ 次の計算をしなさい。


① $4.27 \div 1.22$




② $9.54 \div 2.12$




③ $7.84 \div 1.6$




④ $8.55 \div 4.75$



⑤ $7.2 \div 1.6$



⑥ $8.04 \div 3.35$





小数のわり算 10

◎ わりすすみ (3けた)

12

日にち： 月 日

名まえ _____

・ 次の計算をしなさい。

① $4.27 \div 1.22$

| | | | | | | |
|---|---|---|---|---|---|-----|
| | | | | | | 3.5 |
| 1 | 2 | 2 | 4 | 2 | 7 | |
| | | | 3 | 6 | 6 | |
| | | | 6 | 1 | 0 | |
| | | | 6 | 1 | 0 | |
| | | | | | | 0 |

② $9.54 \div 2.12$

| | | | | | | |
|---|---|---|---|---|---|-----|
| | | | | | | 4.5 |
| 2 | 1 | 2 | 9 | 5 | 4 | |
| | | | 8 | 4 | 8 | |
| | | | 1 | 0 | 6 | 0 |
| | | | 1 | 0 | 6 | 0 |
| | | | | | | 0 |

③ $7.84 \div 1.6$

| | | | | | | |
|---|---|---|---|---|--|-----|
| | | | | | | 4.9 |
| 1 | 6 | 7 | 8 | 4 | | |
| | | 6 | 4 | | | |
| | | 1 | 4 | 4 | | |
| | | 1 | 4 | 4 | | |
| | | | | | | 0 |

④ $8.55 \div 4.75$

| | | | | | | |
|---|---|---|---|---|---|-----|
| | | | | | | 1.8 |
| 4 | 7 | 5 | 8 | 5 | 5 | |
| | | | 4 | 7 | 5 | |
| | | | 3 | 8 | 0 | 0 |
| | | | 3 | 8 | 0 | 0 |
| | | | | | | 0 |

⑤ $7.2 \div 1.6$

| | | | | | | |
|---|---|---|---|---|--|-----|
| | | | | | | 4.5 |
| 1 | 6 | 7 | 2 | | | |
| | | 6 | 4 | | | |
| | | | 8 | 0 | | |
| | | | 8 | 0 | | |
| | | | | | | 0 |

⑥ $8.04 \div 3.35$

| | | | | | | |
|---|---|---|---|---|---|-----|
| | | | | | | 2.4 |
| 3 | 3 | 5 | 8 | 0 | 4 | |
| | | | 6 | 7 | 0 | |
| | | | 1 | 3 | 4 | 0 |
| | | | 1 | 3 | 4 | 0 |
| | | | | | | 0 |