



# 小数のわり算II

◎ わりすすみ  
(商が小数第一位までの真小数)




日にち： 月 日


名まえ \_\_\_\_\_

・ 次の計算をしなさい。


①  $0.9 \div 1.8$




②  $0.7 \div 3.5$




③  $0.6 \div 1.2$




④  $2.64 \div 4.4$



⑤  $4.5 \div 1.8$



⑥  $0.3 \div 1.5$





# 小数のわり算II

◎ わりすすみ  
(商が小数第一位までの真小数)

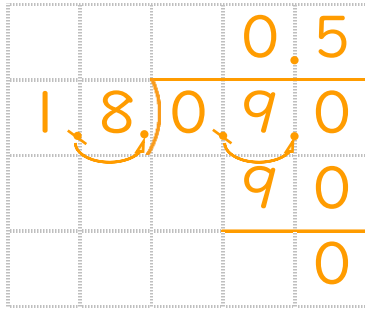


日にち：            月            日

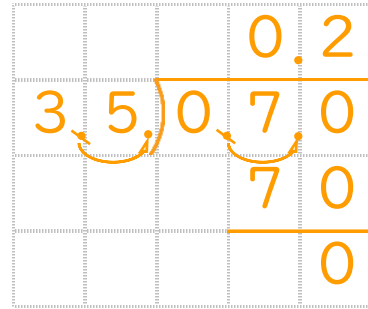
名まえ \_\_\_\_\_

・ 次の計算をしなさい。

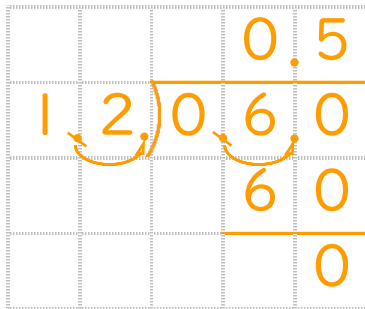
①  $0.9 \div 1.8$



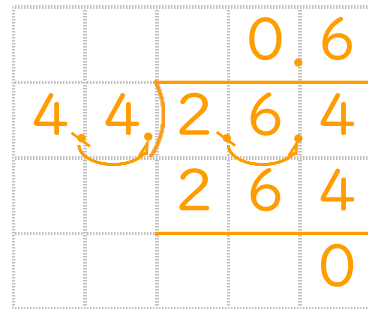
②  $0.7 \div 3.5$



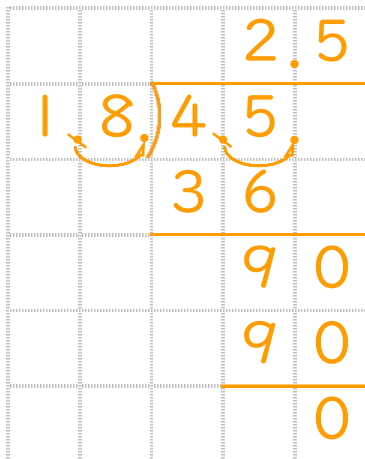
③  $0.6 \div 1.2$



④  $2.64 \div 4.4$



⑤  $4.5 \div 1.8$



⑥  $0.3 \div 1.5$

