



小数のわり算 11

◎ わりすすみ
(商が小数第一位までの真小数)

15


目指せ80点!




名まえ _____

・ 次の計算をしなさい。(各20点)


① $0.5 \div 2.5$




② $0.6 \div 1.2$




③ $0.7 \div 3.5$



④ $4.88 \div 6.1$



⑤ $0.9 \div 1.5$





小数のわり算 ①

◎ わりすすみ
(商が小数第一位までの真小数)

15

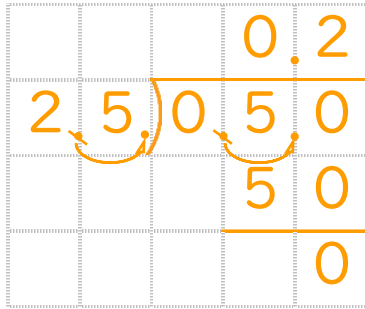
目指せ80点!



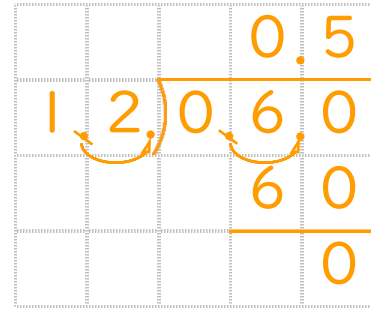
名まえ _____

・ 次の計算をしなさい。(各20点)

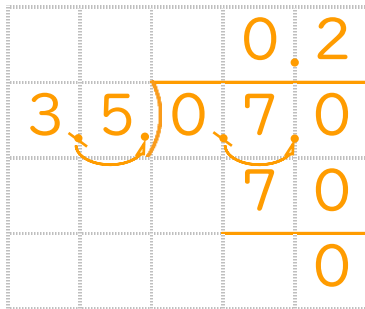
① $0.5 \div 2.5$



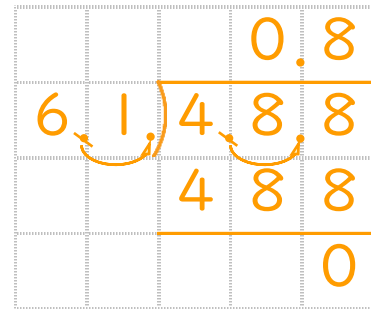
② $0.6 \div 1.2$



③ $0.7 \div 3.5$



④ $4.88 \div 6.1$



⑤ $0.9 \div 1.5$

