

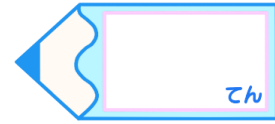


# 小数のわり算 10

◎ わりすすみ (3けた)

15


目指せ80点!




名まえ \_\_\_\_\_

・ 次の計算をしなさい。(各20点)


①  $4.44 \div 2.96$




②  $4.23 \div 4.7$




③  $94.6 \div 2.15$



④  $9.36 \div 2.08$



⑤  $8.19 \div 2.34$



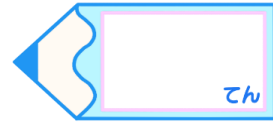


# 小数のわり算 10

◎ わりすすみ (3けた)

15

目指せ80点!



名まえ \_\_\_\_\_

・ 次の計算をしなさい。(各20点)

①  $4.44 \div 2.96$

					1.5
2	9	6	4	4	4
			2	9	6
			1	4	8
			1	4	8
					0

②  $4.23 \div 4.7$

					0.9
4	7	4	2	3	
			4	2	3
					0

③  $94.6 \div 2.15$

					44
2	1	5	9	4	6
			8	6	0
			8	6	0
			8	6	0
					0

④  $9.36 \div 2.08$

					4.5
2	0	8	9	3	6
			8	3	2
			1	0	4
			1	0	4
					0

⑤  $8.19 \div 2.34$

					3.5
2	3	4	8	1	9
			7	0	2
			1	1	7
			1	1	7
					0