

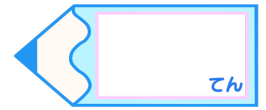


分数のたし算とひき算 14

【約分】分母と分子を同じ数でわる

15

目指せ80点!



名まえ

1 にあてはまる数を書きましょう。(各10点)

$$\textcircled{1} \quad \frac{9}{15} = \frac{9 \div \square}{15 \div \square} = \frac{3}{5}$$

$$\textcircled{4} \quad \frac{15}{27} = \frac{15 \div \square}{27 \div \square} = \frac{5}{9}$$

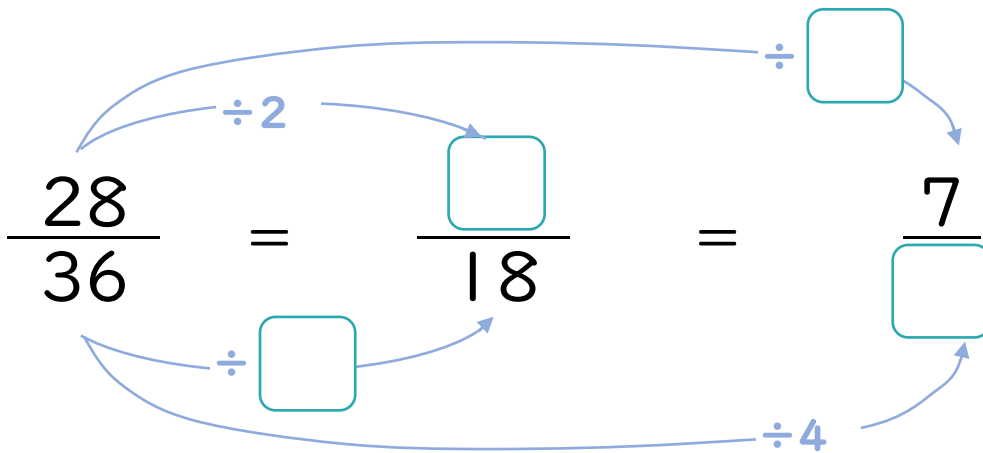
$$\textcircled{2} \quad \frac{24}{28} = \frac{24 \div \square}{28 \div \square} = \frac{6}{7}$$

$$\textcircled{5} \quad \frac{20}{24} = \frac{20 \div \square}{24 \div \square} = \frac{5}{6}$$

$$\textcircled{3} \quad \frac{24}{32} = \frac{24 \div \square}{32 \div \square} = \frac{3}{4}$$

$$\textcircled{6} \quad \frac{14}{16} = \frac{14 \div \square}{16 \div \square} = \frac{7}{8}$$

2 にあてはまる数を書きましょう。(各10点)



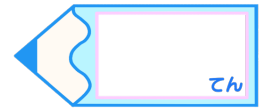


分数のたし算とひき算 14

【約分】分母と分子を同じ数でわる

15

目指せ80点!



名まえ

1 にあてはまる数を書きましょう。(各10点)

$$\textcircled{1} \quad \frac{9}{15} = \frac{9 \div \boxed{3}}{15 \div \boxed{3}} = \frac{3}{5}$$

$$\textcircled{4} \quad \frac{15}{27} = \frac{15 \div \boxed{3}}{27 \div \boxed{3}} = \frac{5}{9}$$

$$\textcircled{2} \quad \frac{24}{28} = \frac{24 \div \boxed{4}}{28 \div \boxed{4}} = \frac{6}{7}$$

$$\textcircled{5} \quad \frac{20}{24} = \frac{20 \div \boxed{4}}{24 \div \boxed{4}} = \frac{5}{6}$$

$$\textcircled{3} \quad \frac{24}{32} = \frac{24 \div \boxed{8}}{32 \div \boxed{8}} = \frac{3}{4}$$

$$\textcircled{6} \quad \frac{14}{16} = \frac{14 \div \boxed{2}}{16 \div \boxed{2}} = \frac{7}{8}$$

2 にあてはまる数を書きましょう。

