

# 分数のたし算とひき算 14

【約分】分母と分子を同じ数でわる

# 16

目指せ80点!



名まえ

1  にあてはまる数を書きましょう。(各10点)

$$\textcircled{1} \quad \frac{15}{27} = \frac{15 \div \square}{27 \div \square} = \frac{5}{9}$$

$$\textcircled{4} \quad \frac{8}{36} = \frac{8 \div \square}{36 \div \square} = \frac{2}{9}$$

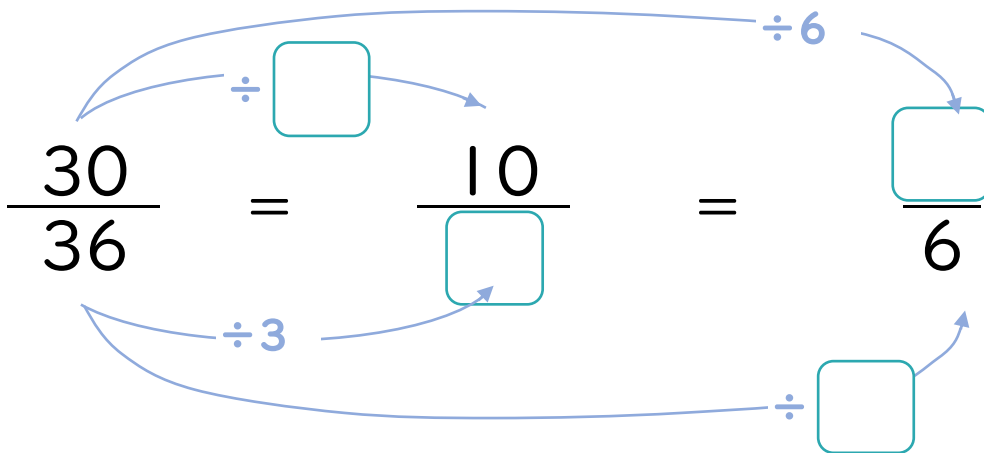
$$\textcircled{2} \quad \frac{16}{56} = \frac{16 \div \square}{56 \div \square} = \frac{2}{7}$$


$$\textcircled{5} \quad \frac{30}{35} = \frac{30 \div \square}{35 \div \square} = \frac{6}{7}$$

$$\textcircled{3} \quad \frac{8}{12} = \frac{8 \div \square}{12 \div \square} = \frac{2}{3}$$

$$\textcircled{6} \quad \frac{18}{48} = \frac{18 \div \square}{48 \div \square} = \frac{3}{8}$$

2  にあてはまる数を書きましょう。(各10点)



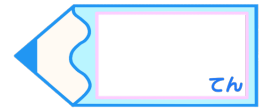


# 分数のたし算とひき算 14

【約分】分母と分子を同じ数でわる

# 16

目指せ80点!



名まえ

1  にあてはまる数を書きましょう。(各10点)

$$\textcircled{1} \quad \frac{15}{27} = \frac{15 \div \boxed{3}}{27 \div \boxed{3}} = \frac{5}{9}$$

$$\textcircled{4} \quad \frac{8}{36} = \frac{8 \div \boxed{4}}{36 \div \boxed{4}} = \frac{2}{9}$$

$$\textcircled{2} \quad \frac{16}{56} = \frac{16 \div \boxed{8}}{56 \div \boxed{8}} = \frac{2}{7}$$

$$\textcircled{5} \quad \frac{30}{35} = \frac{30 \div \boxed{5}}{35 \div \boxed{5}} = \frac{6}{7}$$

$$\textcircled{3} \quad \frac{8}{12} = \frac{8 \div \boxed{4}}{12 \div \boxed{4}} = \frac{2}{3}$$

$$\textcircled{6} \quad \frac{18}{48} = \frac{18 \div \boxed{6}}{48 \div \boxed{6}} = \frac{3}{8}$$

2  にあてはまる数を書きましょう。

