



小数のかけ算 17

3

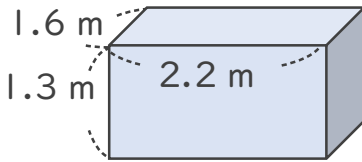
◎ 直方体の体積

日にち： 月 日

名まえ _____

・ 次の立体の体積は何 m^3 でしょうか。

①



式:

$$\begin{array}{c} \boxed{1.6} \\ \text{たて} \end{array} \times \begin{array}{c} \boxed{2.2} \\ \text{よこ} \end{array} \times \begin{array}{c} \boxed{1.3} \\ \text{高さ} \end{array} = \boxed{} \text{体積}$$

<筆算>

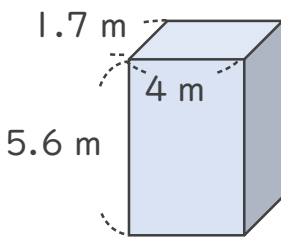
| | | | |
|-------|---|---|---|
| | | 1 | 6 |
| | × | 2 | 2 |
| <hr/> | | | |
| | | | |
| | | | |
| | | | |
| | | | |

<筆算>

| | | | |
|-------|---|--|--|
| | | | |
| | × | | |
| <hr/> | | | |
| | | | |
| | | | |
| | | | |
| | | | |

答え： _____ m^3

②



式:

$$\boxed{} \times \boxed{} \times \boxed{} = \boxed{} \text{体積}$$


<筆算>

| | | | |
|-------|---|--|--|
| | | | |
| | × | | |
| <hr/> | | | |
| | | | |
| | | | |
| | | | |
| | | | |

<筆算>

| | | | |
|-------|---|--|--|
| | | | |
| | × | | |
| <hr/> | | | |
| | | | |
| | | | |
| | | | |
| | | | |





小数のかけ算 17

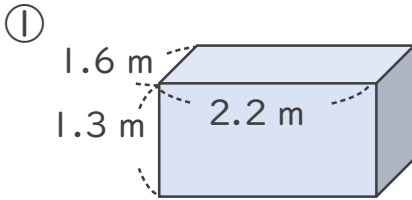
3

◎ 直方体の体積

日にち： 月 日

名まえ _____

・ 次の立体の体積は何 m^3 でしょうか。



式:

$$\boxed{1.6} \times \boxed{2.2} \times \boxed{1.3} = \boxed{4.576}$$

たて よこ 高さ 体積

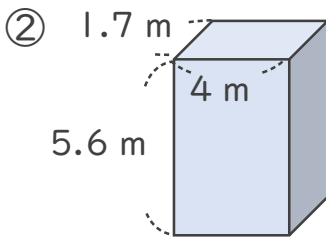
<筆算>

| | | |
|-------|----|------|
| | | 1.6 |
| × | | 2.2 |
| <hr/> | | |
| | | 32 |
| | 32 | |
| <hr/> | | |
| | | 3.52 |

<筆算>

| | | | |
|-------|-----|--|------|
| | | | 3.52 |
| × | | | 1.3 |
| <hr/> | | | |
| | | | 1056 |
| | 352 | | |
| <hr/> | | | |
| | | | 4576 |

答え： 4.576 m^3



式:

$$\boxed{1.7} \times \boxed{4} \times \boxed{5.6} = \boxed{38.08}$$

たて よこ 高さ 体積

<筆算>

| | | |
|-------|--|-----|
| | | 1.7 |
| × | | 4 |
| <hr/> | | |
| | | 6.8 |

<筆算>

| | | | |
|-------|-----|--|------|
| | | | 6.8 |
| × | | | 5.6 |
| <hr/> | | | |
| | | | 408 |
| | 340 | | |
| <hr/> | | | |
| | | | 3808 |

答え： 38.08 m^3

